


Before you begin, practise your times tables on Time Tables Rockstars for 20 minutes

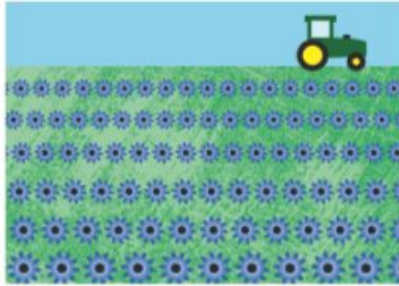
Simple Adding

**Lesson
5**

In Focus



432 flowers




521 flowers

How many flowers are there altogether?







Let's Learn

Add 432 and 521.

Use  to help you add.



Step 1 Add the ones.
2 ones + 1 one = 3 ones

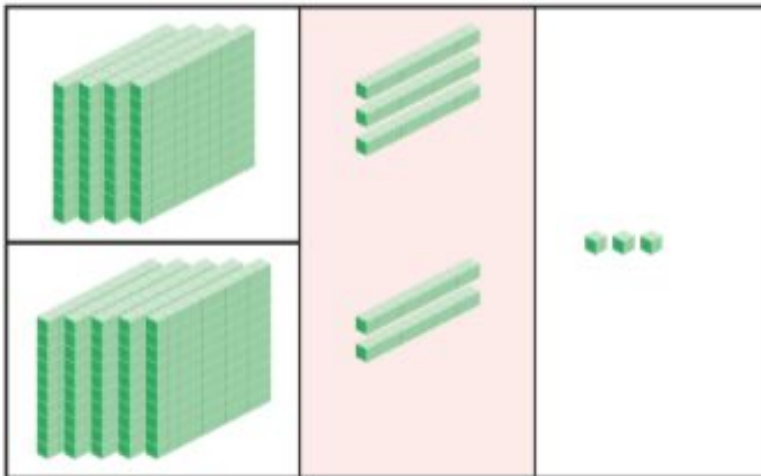
	h	t	o
	4	3	2
+	5	2	1
<hr/>			3
<hr/>			



C1 - Session 4

Step 2 Add the tens.

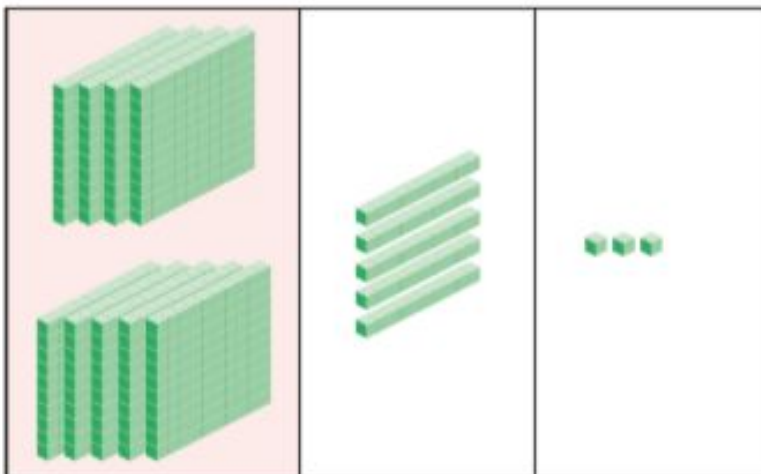
$$3 \text{ tens} + 2 \text{ tens} = 5 \text{ tens}$$



	h	t	o
	4	3	2
+	5	2	1
<hr/>			
		5	3
<hr/>			

Step 3 Add the hundreds.

$$4 \text{ hundreds} + 5 \text{ hundreds} = 9 \text{ hundreds}$$



	h	t	o
	4	3	2
+	5	2	1
<hr/>			
	9	5	3
<hr/>			

$$432 + 521 = 953$$

There are 953 flowers altogether.

Guided Practice

Add.

1 (a) $153 + 2 = 155$

(b) $153 + 20 = 173$

(c) $153 + 200 = 353$

2 (a) $214 + 3 = 217$

(b) $214 + 30 = 244$

(c) $214 + 300 = 514$

3 (a) $325 + 14 = 339$

	h	t	o
	3	2	5
+		1	4
3 3 9			

(b) $236 + 543 = 779$

	h	t	o
	2	3	6
+	5	4	3
7 7 9			

(c) $457 + 432 = 889$

	h	t	o
	4	5	7
+	4	3	2
8 8 9			

(d) $500 + 171 = 671$

	h	t	o
	5	0	0
+	1	7	1
6 7 1			

(e) $31 + 448 = 479$

	h	t	o
	4	4	8
+		3	1
4 7 9			

(f) $605 + 384 = 989$

	h	t	o
	6	0	5
+	3	8	4
9 8 9			

Worksheet 5**Simple Adding****1** Fill in the blanks.

(a) $253 + 2 =$

(b) $542 + 4 =$

(c) $253 + 20 =$

(d) $542 + 40 =$

(e) $253 + 200 =$

(f) $542 + 400 =$

2 Match.

$394 + 200$ ●

● 299

$50 + 345$ ●

● 368

$268 + 31$ ●

● 572

$111 + 257$ ●

● 395

$400 + 138$ ●

● 594

$272 + 300$ ●

● 538

3 Add.

(a)

	h	t	o
	2	5	9
+	3	1	0

(b)

	h	t	o
	1	3	7
+	5	2	1

(c)

	h	t	o
	8	4	6
+		5	3

(d)

	h	t	o
	6	7	8
+	2	0	1

(e)

	h	t	o
	4	5	6
+	3	2	1

(f)

	h	t	o
	3	4	6
+	6	5	2

Answers

1a)

b)

c)

d)

e)

f)

2)

$$394 + 200 =$$

$$50 + 345 =$$

$$268 + 31 =$$

$$111 + 257 =$$

$$400 + 138 =$$

$$272 + 300 =$$

3a)

b)

c)

d)

e)

f)