

[BLANK PAGE]

Please do not write on this page.

Instructions

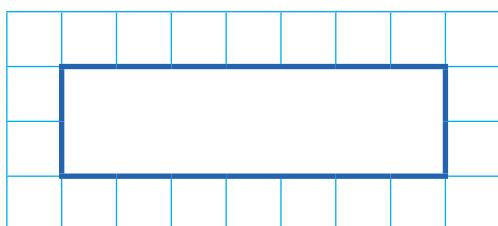
You **may not** use a calculator to answer any questions in this test.

Questions and answers

You have **20 minutes** to complete this test.

Work as quickly and as carefully as you can.

Put your answer in the box for each question.

A grid consisting of 10 columns and 5 rows of small squares. A larger rectangle is drawn inside the grid, spanning 6 columns and 2 rows, intended for writing an answer.

If you cannot do one of the questions, **go on to the next one**.

You can come back to it later, if you have time.

If you finish before the end, **go back and check your work**.

Marks

The number under each box at the side of the page tells you the maximum number of marks for each question.

1

$$3,740 - 1,000 =$$

A grid of 20 columns and 10 rows. A rectangular box is drawn in the bottom right corner, spanning 10 columns and 2 rows, intended for the student to write the answer.

1 mark

2

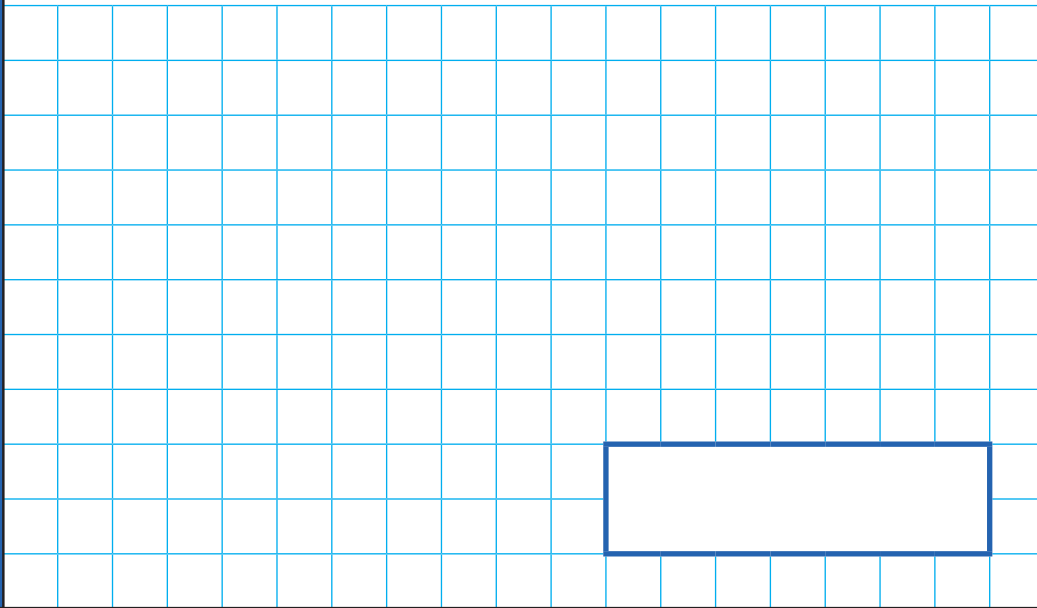
$$26 \times 10 =$$

A grid of 20 columns and 10 rows. A rectangular box is drawn in the bottom right corner, spanning 10 columns and 2 rows, intended for the student to write the answer.

1 mark

3

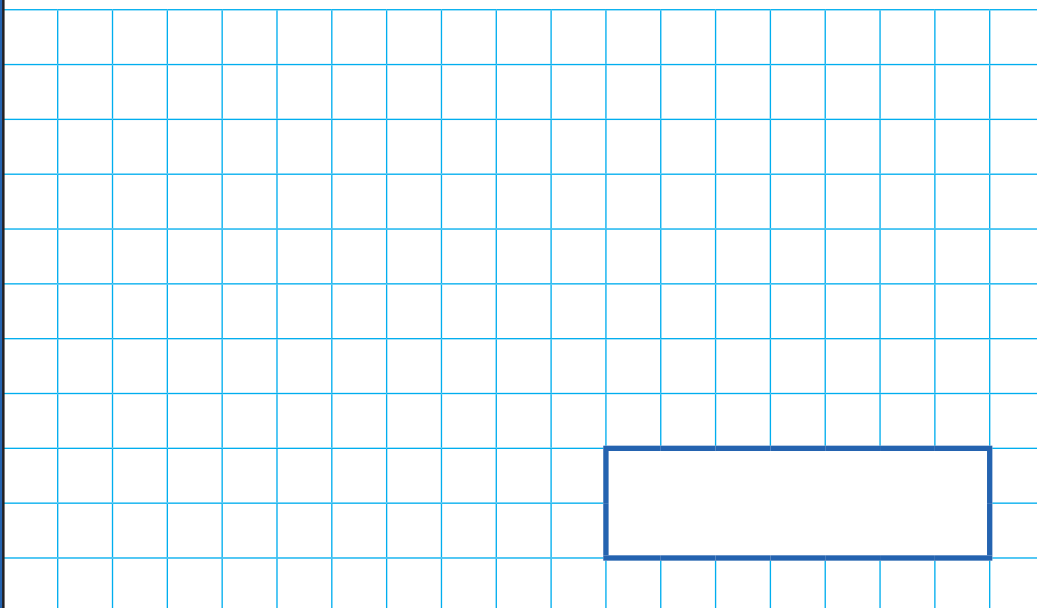
$$542 + 367 =$$



1 mark

4

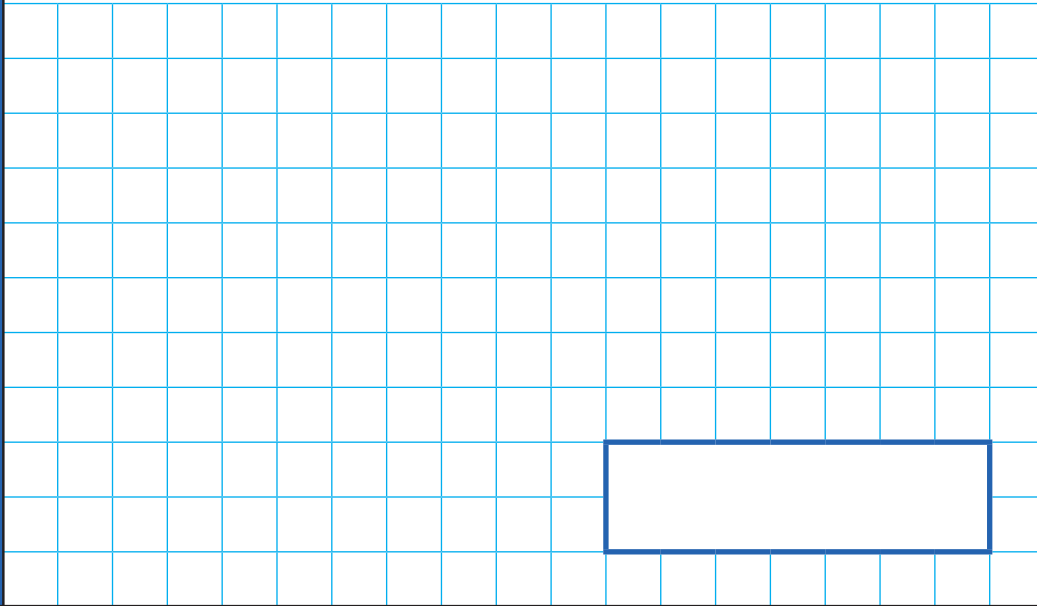
$$27 \div 3 =$$



1 mark

5

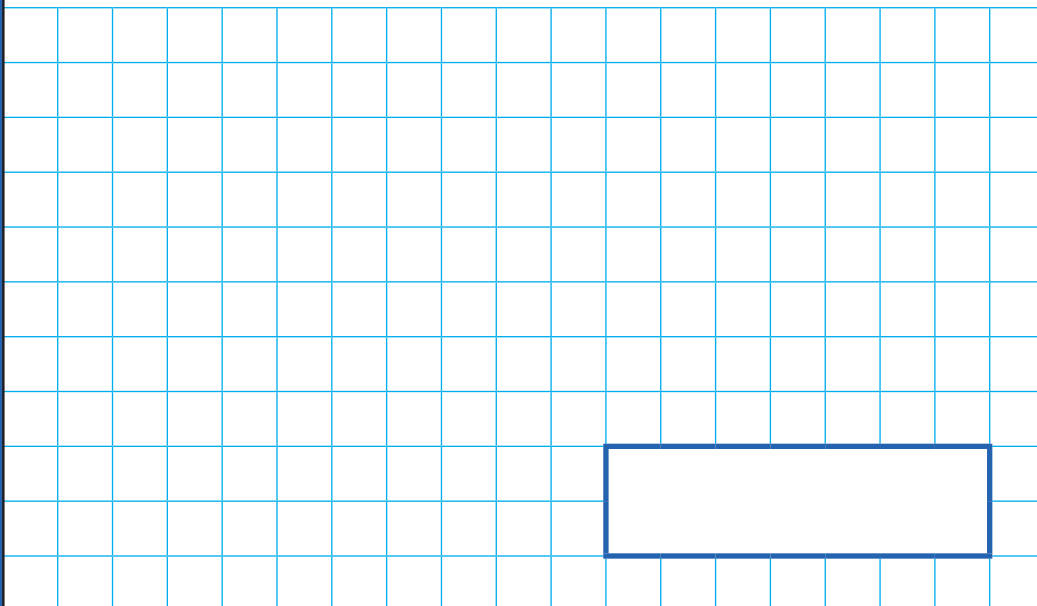
$$2,710 - 1,455 =$$



1 mark

6

$$\frac{4}{7} + \frac{6}{7} =$$



1 mark

7

$$3 \times 7 \times 7 =$$

1 mark

8

$$1 \text{ metre} + 350 \text{ centimetres} =$$

1 mark

9

$$\frac{2}{9} + \frac{8}{9} - \frac{4}{9} =$$

1 mark

10

$$£3.42 - £1.72 =$$

1 mark

11

$$126 \times 5 =$$

A large grid for working out the multiplication problem. The grid is 20 squares wide and 15 squares high. A rectangular box is drawn on the grid, spanning 10 squares in width and 2 squares in height, positioned in the lower right area of the grid.

1 mark

12

$$450 + \boxed{} - 226 = 1,000$$

A large grid for working out the equation. The grid is 20 squares wide and 15 squares high. A rectangular box is drawn on the grid, spanning 10 squares in width and 2 squares in height, positioned in the upper left area of the grid.

2 marks

13

$$\frac{2}{5} \text{ of } 80 =$$

1 mark

14

$$72 \div \boxed{} = 9$$

1 mark

15

3 litres = + 1,257 ml

2 marks


16

$24 \times 5 =$ $\times 10$

1 mark

17

$$\frac{12}{5} - \frac{4}{5} = \boxed{} + 1$$



2 marks

[BLANK PAGE]

Please do not write on this page.

[BLANK PAGE]

Please do not write on this page.

[BLANK PAGE]

Please do not write on this page.

[BLANK PAGE]

Please do not write on this page.