

Arithmetic

Before you begin, practise your times tables on Time Tables Rockstars for 20 minutes

Simple Subtracting

Lesson
15

In Focus

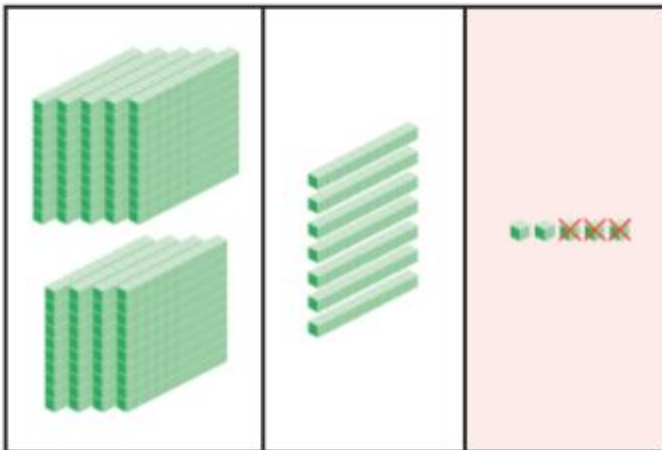
There were 975 beads in a jar.
Emma used 723 beads to make some necklaces.
How many beads were left in the jar?



Let's Learn

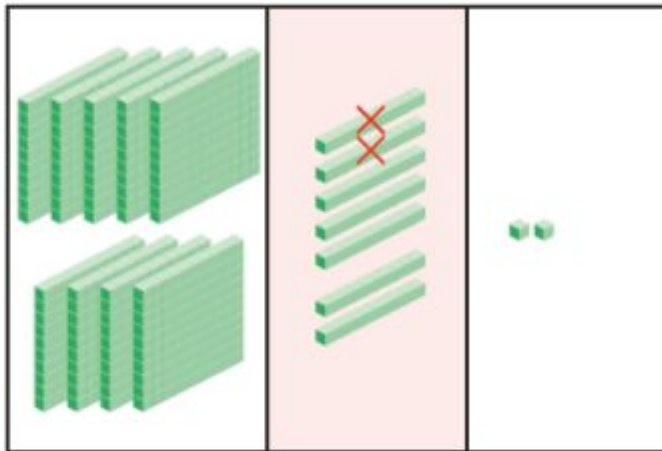
Subtract 723 from 975.

Step 1 Subtract the ones.
 $5 \text{ ones} - 3 \text{ ones} = 2 \text{ ones}$



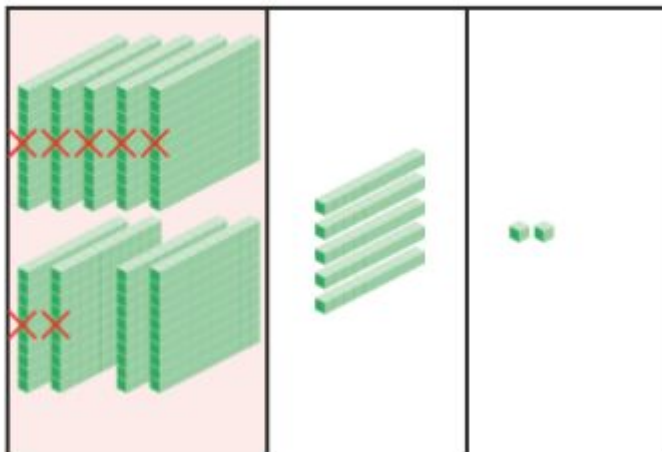
| | h | t | o |
|-------|---|---|---|
| | 9 | 7 | 5 |
| - | 7 | 2 | 3 |
| <hr/> | | | 2 |
| <hr/> | | | |

Step 2 Subtract the tens.
 $7 \text{ tens} - 2 \text{ tens} = 5 \text{ tens}$



| | h | t | o |
|-------|---|---|---|
| | 9 | 7 | 5 |
| - | 7 | 2 | 3 |
| <hr/> | | | |
| | | 5 | 2 |
| <hr/> | | | |

Step 3 Subtract the hundreds.
 $9 \text{ hundreds} - 7 \text{ hundreds} = 2 \text{ hundreds}$



| | h | t | o |
|-------|---|---|---|
| | 9 | 7 | 5 |
| - | 7 | 2 | 3 |
| <hr/> | | | |
| | 2 | 5 | 2 |
| <hr/> | | | |

$$975 - 723 = 252$$

There were 252 beads left in the jar.

Guided Practice

1 $375 - 142 = 233$

$$\begin{array}{r} 375 \\ - 142 \\ \hline 233 \end{array}$$

2 $689 - 407 = 282$

$$\begin{array}{r} 689 \\ - 407 \\ \hline 282 \end{array}$$

3 $548 - 17 = 531$

4 $424 - 123 = 301$

5 $904 - 103 = 801$

Worksheet 15

Simple Subtracting


1 Cross out the appropriate number of blocks and fill in the blanks.

(a) Subtract 321 from 456.



$$\square - \square = \square$$

(b) Subtract 615 from 658.



$$\square - \square = \square$$

(c) Subtract 357 from 687.



$$\square - \square = \square$$

2 Subtract.

(a)

| | h | t | o |
|-------|---|---|---|
| | 2 | 6 | 5 |
| - | 1 | 3 | 2 |
| <hr/> | | | |
| <hr/> | | | |

(b)

| | h | t | o |
|-------|---|---|---|
| | 4 | 8 | 5 |
| - | 1 | 8 | 2 |
| <hr/> | | | |
| <hr/> | | | |

(c)

| | h | t | o |
|-------|---|---|---|
| | 6 | 5 | 8 |
| - | 2 | 1 | 4 |
| <hr/> | | | |
| <hr/> | | | |

(d)

| | h | t | o |
|-------|---|---|---|
| | 7 | 6 | 9 |
| - | 2 | 5 | 4 |
| <hr/> | | | |
| <hr/> | | | |

(e)

| | h | t | o |
|-------|---|---|---|
| | 6 | 9 | 9 |
| - | 4 | 2 | 9 |
| <hr/> | | | |
| <hr/> | | | |

(f)

| | h | t | o |
|-------|---|---|---|
| | 8 | 7 | 3 |
| - | 5 | 4 | 1 |
| <hr/> | | | |
| <hr/> | | | |

Answers

1

a) _____ - _____ =

b) _____ - _____ =

c) _____ - _____ =

2

a)

b)

c)

d)

e)

f)