

## Arithmetic

$$367 - 245 =$$

$$234 + 654 =$$

$$3 \times 27 =$$

# Measuring Time in Hours

## Lesson 13

### In Focus



We have been here for 5 hours!

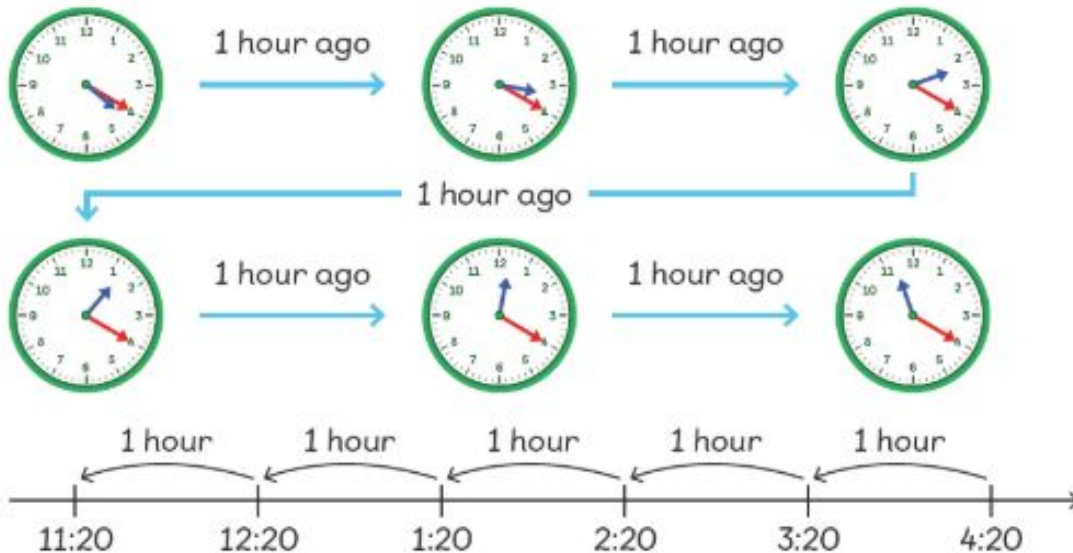
Emma

At what time did Emma arrive?



### Let's Learn

1

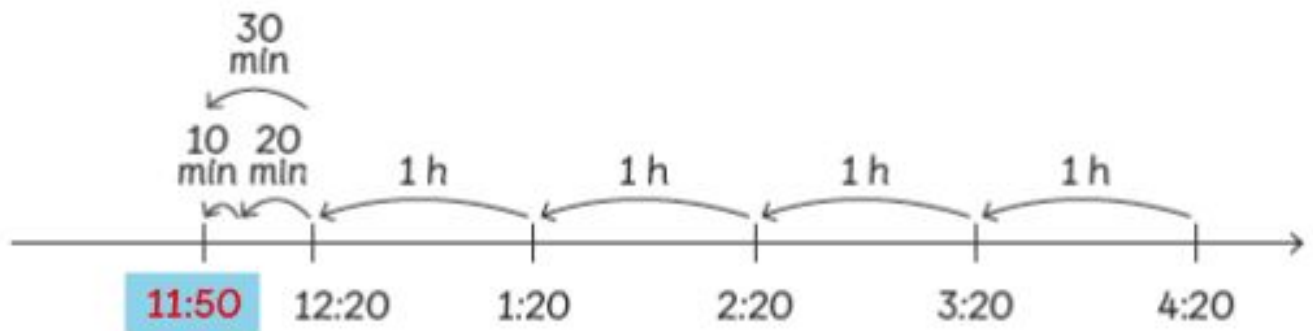


Emma arrived at 11:20 in the morning.



What if Emma arrived 4 hours and 30 minutes earlier rather than 5 hours earlier? How would that change the starting time?

2 What if Emma had been there for 4 hours and 30 minutes?



Then, Emma would have arrived at **11:50** in the morning.

## Guided Practice

At what time did each of them arrive?

(a)

I have been here  
for an hour.



**2:45**

(b)

I have been here  
for 3 hours.



**12:45**

(c)

I have been here  
for 4 hours.







**11:45**



## Worksheet 13

### Measuring Time in Hours

Elliott, Emma, Amira and Hannah completed their homework at the same time: at 2:48 p.m. What time did each of them start doing it? Fill in the blanks with the correct time.

name	start time	time spent	end time
 Elliott		I spent 3 hours doing my homework.	2:48 p.m.
 Emma		I did my my homework for 4 hours.	
 Amira		I only spent 1 hour on my homework.	
 Hannah		I worked for 2 hours and 30 minutes.	

### Answers

Elliott -

Emma -

Amira -

Hannah -