

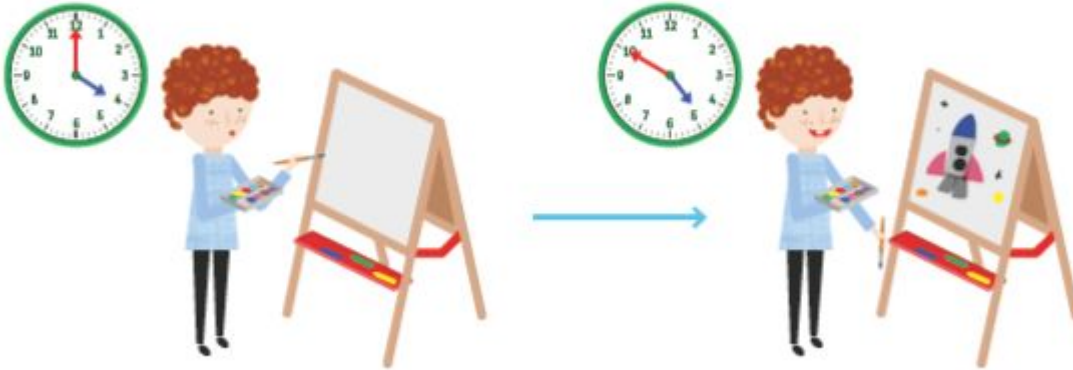
## Arithmetic

Before you begin, practise your times tables on Time Tables Rockstars for 20 minutes

# Measuring Time in Minutes

Lesson  
14

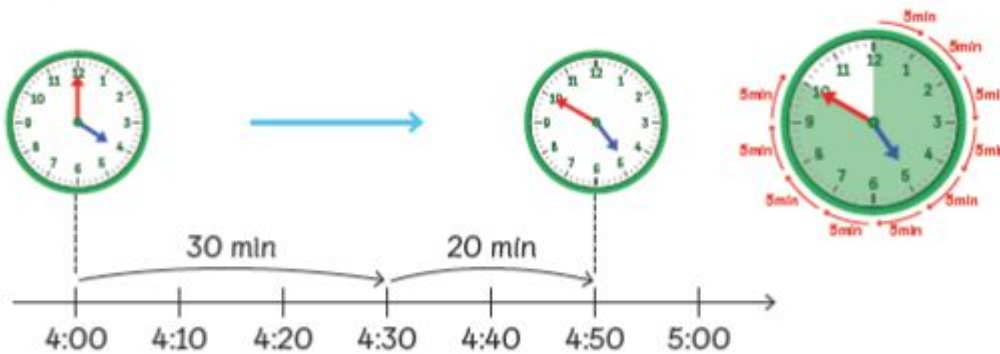
## In Focus



How long did Elliott take to finish the painting?

## Let's Learn

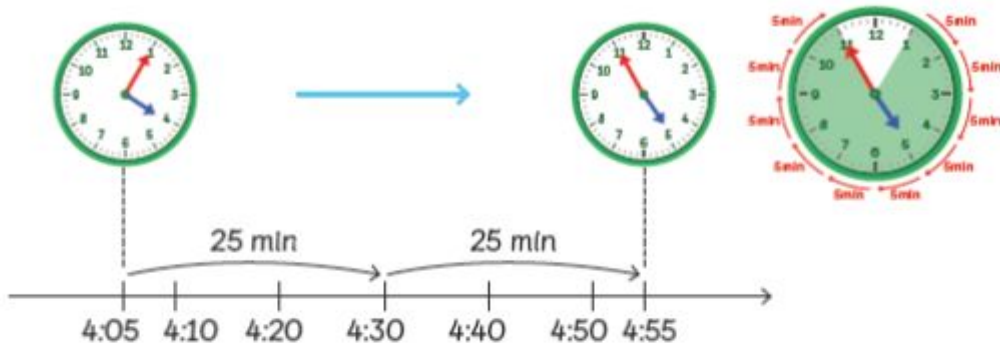
- 1 Find the number of minutes Elliott took to paint.



Elliott took 50 minutes to finish the painting.

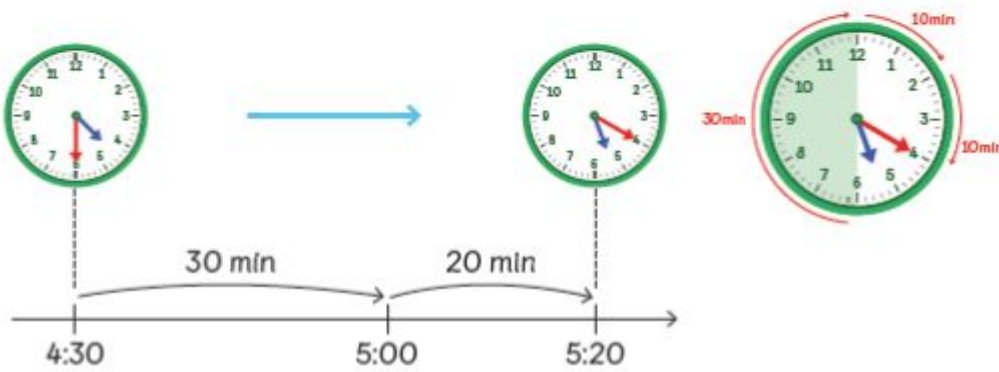
'Length of time' can also be called the 'duration of time'.

2 If Elliott started at 4:05 p.m., at what time would he finish the painting?



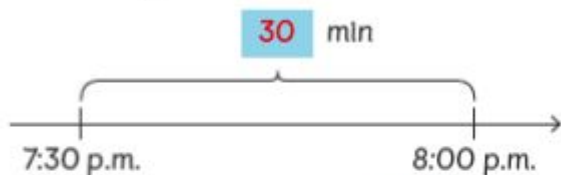
Elliott would finish the painting at 4:55 p.m.

3 If Elliott started at 4:30 p.m., at what time would he finish the painting?



Elliott would finish the painting at 5:20 p.m.

- 4 Lulu wants to watch "Eastenders".  
How long is the programme?



The programme lasts for 30 minutes.



We can also ask,  
"What is the duration  
of the programme?"

## Guided Practice

- 1 Write down how long each activity took.

start end



Suggest what each  
activity could be.



- 2 Write down how long each activity took.

(a) start end



34 minutes

(b) start end



23 minutes



# Worksheet 14

## Measuring Time in Minutes

How many minutes have gone by? Fill in the blanks.

(a)



min



(b)



min



(c)



min



(d)



min



(e)

05:26



min

06:04

## Answers

- a)
- b)
- c)
- d)
- e)