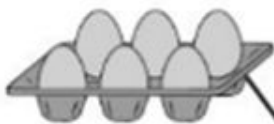
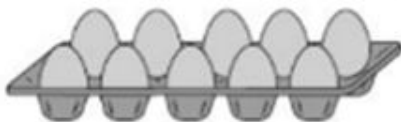


1 Match each egg box to the correct multiplication.

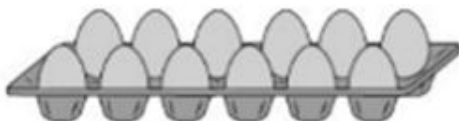
One is done for you.



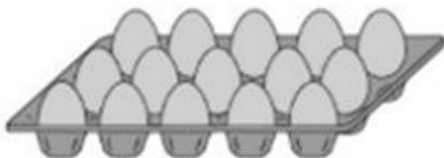
$$6 \times 2$$



$$5 \times 3$$



$$3 \times 2$$



$$5 \times 2$$

2

Write the correct numbers in the boxes.

Half of 12 is

Double 12 is

3

Here is a diagram for sorting numbers.

Write each number in the correct box.

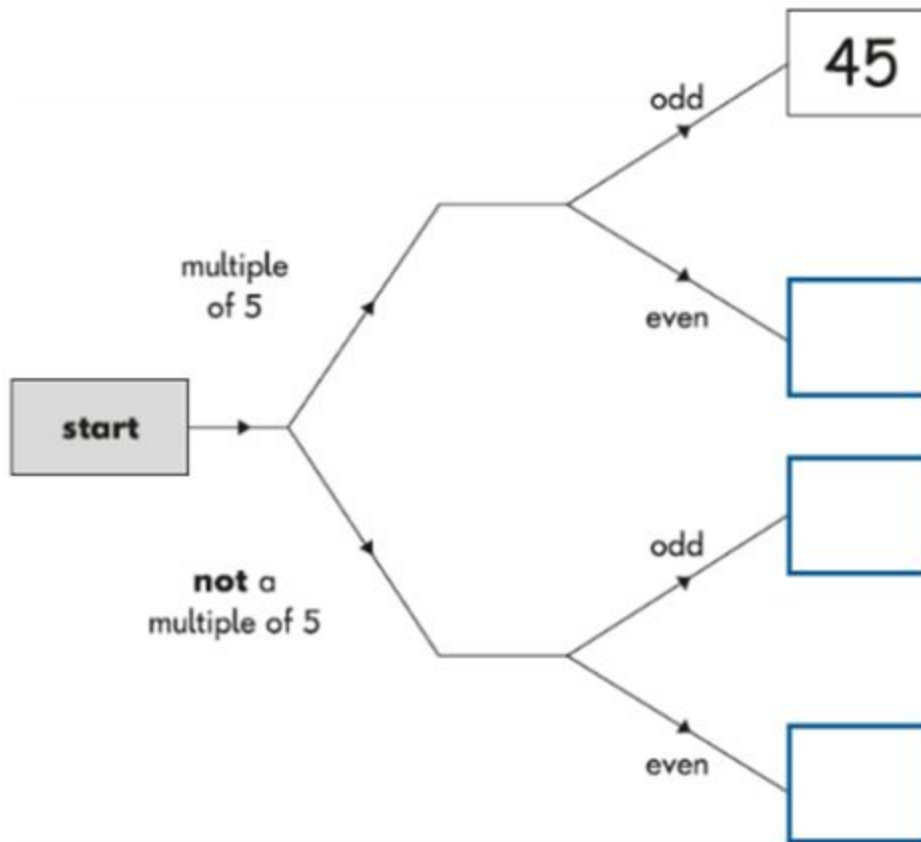
One is done for you.

~~45~~

46

20

53



4

Write numbers in the boxes to make this correct.

$$30 \div \square = \square$$

5

Write the missing number in the box.

$$\square \div 2 = 7$$

**6**Look at these **three** numbers.

5      12      60

Use **all three** numbers to make these correct.

$$\boxed{\phantom{000}} \div \boxed{\phantom{000}} = \boxed{\phantom{000}}$$

$$\boxed{\phantom{000}} \times \boxed{\phantom{000}} = \boxed{\phantom{000}}$$

**7**

Write the missing number in the box.

$$5 \times 4 = 10 \times \boxed{\phantom{00}}$$





10

This is a multiplication square.

Write the numbers missing from the **two** white squares.

5					
2					
4					
1		5			
3				6	
×	1	5	3	2	4

11

Write   or

in each box to make the sentences correct.

Multiples of 2  end in 3

Multiples of 5  end in 5

Multiples of 10  end in 0