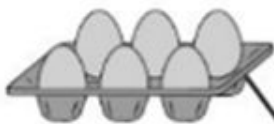
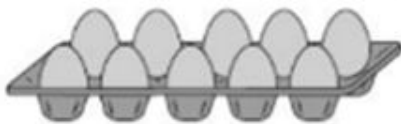


1 Match each egg box to the correct multiplication.

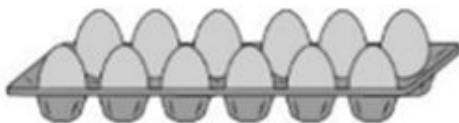
One is done for you.



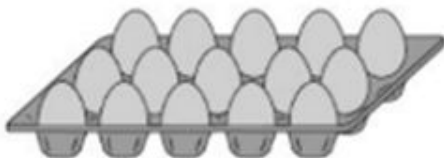
$$6 \times 2$$



$$5 \times 3$$



$$3 \times 2$$



$$5 \times 2$$

2

Write the correct numbers in the boxes.

Half of 12 is

Double 12 is

3

Here is a diagram for sorting numbers.

Write each number in the correct box.

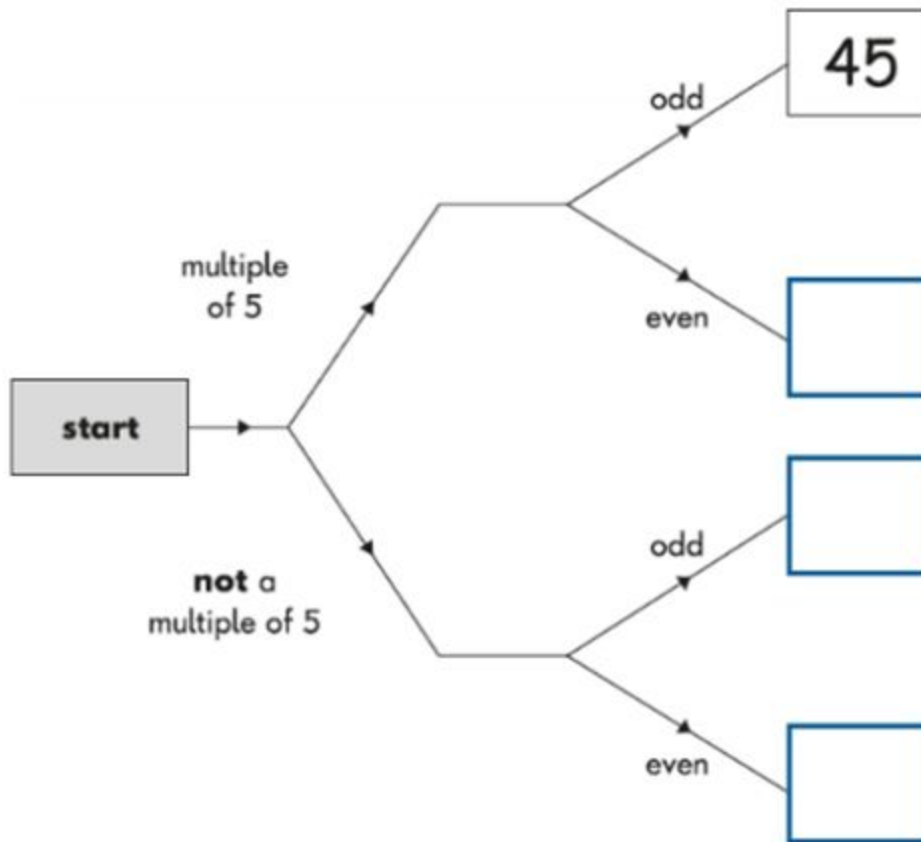
One is done for you.

~~45~~

46

20

53



5

Write the missing number in the box.

$$\square \div 2 = 7$$

6 Desi needs **18** balloons.

The shop sells balloons in packs of **5**.



How many packs does he need to buy?

packs

7 Look at these **three** numbers.

5 12 60

Use **all three** numbers to make these correct.


$$\boxed{} \div \boxed{} = \boxed{}$$

$$\boxed{} \times \boxed{} = \boxed{}$$

9

Alex buys **6** packets of stickers.

There are **5** stickers in each packet.



(a) How many stickers does he buy?

stickers

(b) Each packet costs **20p**.

How many packets can you buy for **£2.00**?

packets

11



Sita worked out the correct answer to 16×5

Her answer was 80

Show how she could have worked out her answer.

Show
your
working

80

- 12 This is a multiplication square.

Write the numbers missing from the **two** white squares.

5					
2					
4					
1		5			
3				6	
×	1	5	3	2	4

- 13 Write or

in each box to make the sentences correct.

Multiples of 2 end in 3

Multiples of 5 end in 5

Multiples of 10 end in 0