

Making Quarters

In Focus



How can the cake be cut into four equal pieces?


That means each person gets the same amount of cake.



Today, we are going to continue learning about fractions. We are going to be focusing on quarters! Tell an adult what you think a quarter is? How many parts are there in a quarter?

Look at the cake above. It is Ruby's birthday and she wants to **equally** cut the cake so that each of the 4 children get a same sized piece.

Let's Learn



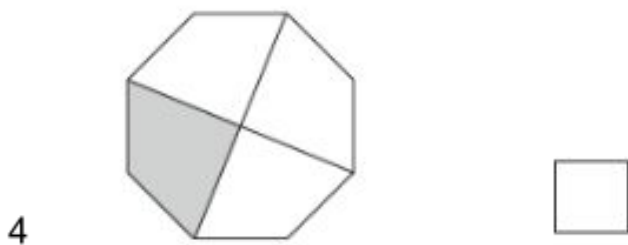
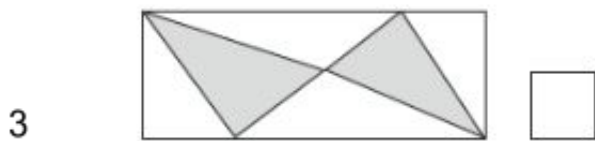
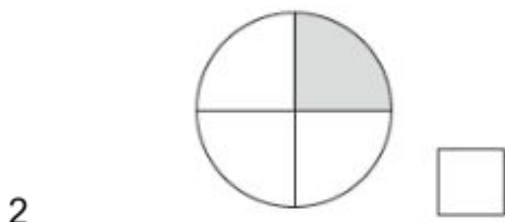
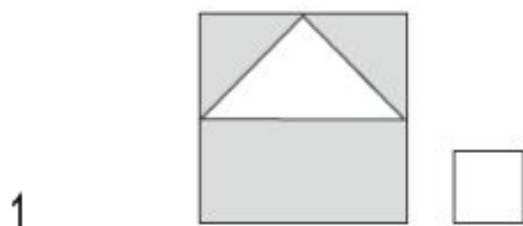
Are these equal?

Are there other ways?



Look and discuss these!

Look at the following shapes and write the numbers where a quarter has been shaded in.



Write your answers here:

Extension:

Draw and make quarters on a square, circle and a rectangle.