

Making Doubles

Lesson
4


In Focus



Today we will be focussing on doubles. Our question for today is 'what happens when we double?' Look at the 'Let's learn part.'

Let's Learn

1




$$\text{Double } 2 = 4$$



2 twos

2

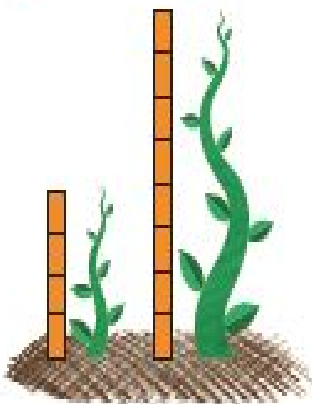


$$\text{Double } 5 = 10$$



2 fives

3

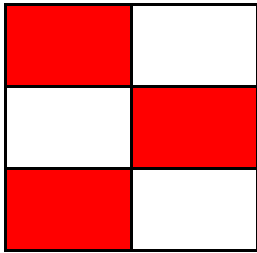


What happens when the beanstalk doubles its height?

Now complete the questions below:

1. Write the missing numbers:


a.



Double 3 =

2 threes =

b.



Double 6 =

2 sixes =

2. What is double 4?

3. What is double 9?