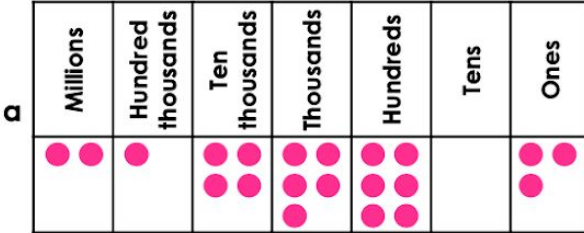


Rounding Numbers

1a. Which two numbers will round to the same value when rounded to the nearest 10,000?



b 2,158,011

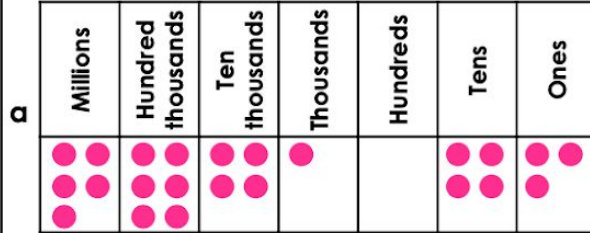
c Two million, one hundred and fifty-one thousand, nine hundred



VF

Rounding Numbers

1b. Which two numbers will round to the same value when rounded to the nearest 100,000?



b 5,663,120

c Five million, seven hundred and nineteen thousand, six hundred



VF

2a. Which numbers round to 2,000,000 when rounding to the nearest 1,000,000?

2,565,705

1,625,900

Two million, three hundred and fifty-five thousand, eight hundred and five



VF

2b. Which numbers round to 4,500,000 when rounding to the nearest 100,000?

4,712,805

4,465,715

Four million, five hundred and two thousand, five hundred and thirty



VF

3a. Tick to show whether the number rounds to 2,900,000 or 3,000,000 to the nearest 100,000.

Number	Rounds to 2,900,000	Rounds to 3,000,000
2,858,790		
3,015,830		
2,945,745		



VF

3b. Tick to show whether the number rounds to 4,900,000 or 5,000,000 to the nearest 10,000.

Number	Rounds to 4,900,000	Rounds to 5,000,000
4,896,344		
4,995,051		
5,003,688		



VF

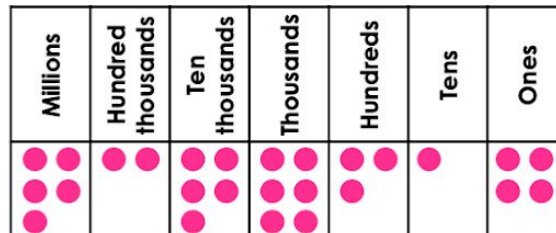
4a. Round the number below to the nearest 10,000, 100,000 and 1,000,000.

Two million, seven hundred and five thousand, six hundred and fifty-four.



VF

4b. Round the number below to the nearest 10,000, 100,000 and 1,000,000.



VF

Rounding Numbers

1a. Which number is the odd one out when rounded to the nearest million and rounded to the nearest hundred thousand? Explain your answers.

Three million, eight hundred and ninety-four thousand, one hundred and seventy

4,492,810

Millions	Hundred thousands	Ten thousands	Thousands	Hundreds	Tens	Ones
●●●	●●●●●	●	●●●	●●	●	●●



R

Rounding Numbers

1b. Which number is the odd one out when rounded to the nearest hundred thousand and rounded to the nearest ten thousand? Explain your answers.

Nine hundred and fifty-one thousand, six hundred and seventeen

947,301

Millions	Hundred thousands	Ten thousands	Thousands	Hundreds	Tens	Ones
●		●●●	●●●	●●	●●	



R


2a. Work out which child has which number. Find two possible solutions.

3,502,005

3,415,667

3,495,811

To the nearest hundred thousand, my number rounds to three and a half million.



Jade

To the nearest million, my number rounds to three million.



Maxine

To the nearest ten thousand, my number rounds to three and a half million.



Justin PS



PS


2b. Work out which child has which number. Find two possible solutions.

4,509,012

4,513,433

4,499,785

To the nearest hundred thousand, my number rounds to four and a half million.




Ellis

To the nearest million, my number rounds to five million.



Toni

To the nearest ten thousand, my number rounds to 4,510,000.



Saanvi PS



PS

3a. Savanna is rounding numbers. She says,

I think that two million, one hundred and forty five thousand, nine hundred and eighty two rounded to the nearest hundred thousand is 2,150,000.



Is she correct? Explain your answer.



R

3b. Trevon is rounding numbers. He says,

I think that five million, four hundred and ninety five thousand, five hundred and ten rounded to the nearest ten thousand is 5,490,000.



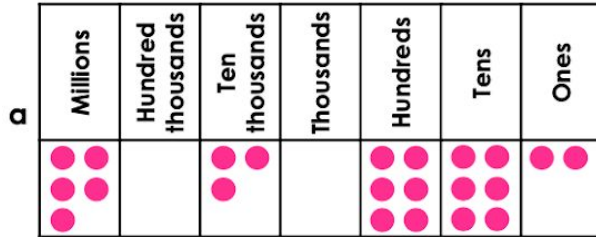
Is he correct? Explain your answer.



R

Rounding Numbers

1a. Which two numbers will round to the same value when rounded to the nearest 1,000?



b 5 million, forty-one thousand, DCII

c Five million, forty-two thousand, CXIV



VF

Rounding Numbers

1b. Which two numbers will round to the same value when rounded to the nearest 100,000?



b 3,278,568

c Three million, one hundred and fifty thousand and seven



VF

2a. Which numbers round to 7,000,000 when rounding to the nearest 100,000?

6,962,DCC

7,039,815

Six million, nine hundred and forty-three thousand, DCCLII



VF

2b. Which numbers round to 3,900,000 when rounding to the nearest 10,000?

3,909,CDLIV

3,899,516

Three million, nine hundred and one thousand and six



VF

3a. to show whether the number rounds to 7,700,000 or 7,800,000 to the nearest 10,000.

Number	Rounds to 7,700,000	Rounds to 7,800,000
7,795,DXXV		
7,704,DCCCXCI		
7,804,000		



VF

3b. Tick to show whether the number rounds to 3,900,000 or 4,000,000 to the nearest 100,000.

Number	Rounds to 3,900,000	Rounds to 4,000,000
3,906,DXII		
3,960,215		
3,851,CI		



VF

4a. Round the number below to the nearest 1,000, 10,000, 100,000 and 1,000,000.

Nine million, MMMDCLXXIX



VF

4b. Round the number below to the nearest 1,000, 10,000, 100,000 and 1,000,000.

Six million, four hundred and twelve thousand, CMXCIX



VF

