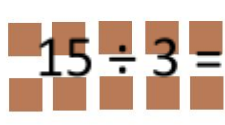




Week 6 - Challenge 1 - Division

Ben has 15 chocolates and 3 friends. They each get

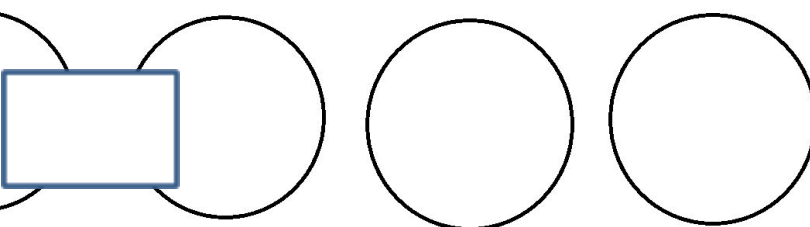
  $15 \div 3 =$   



Sally has 12 sweets. She shares them between 4 friends.

How many do they get each?



$12 \div 4 =$   

Try these. You can draw pictures on a paper to help you.

a)  $20 \div 5 =$

b)  $16 \div 4 =$

c)  $9 \div 3 =$

d)  $24 \div 8 =$