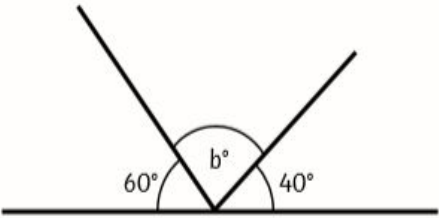
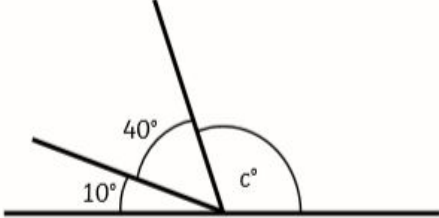
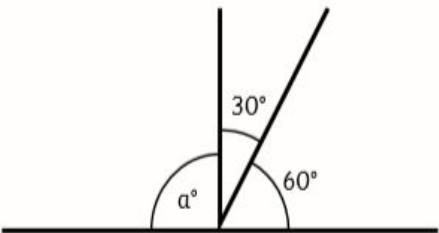
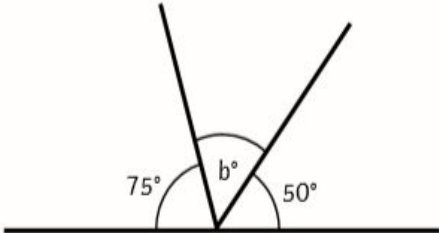
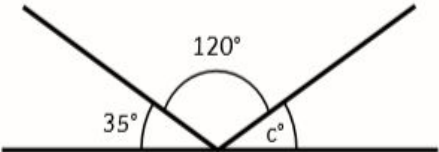
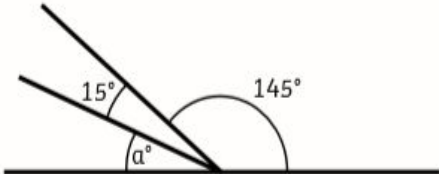
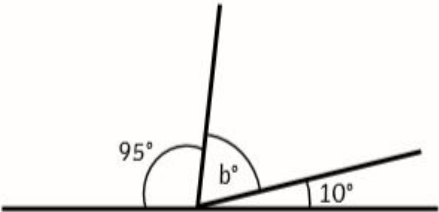
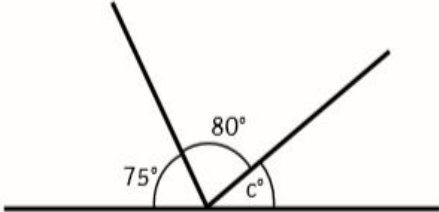


Challenge 1 Day 2

Work out the missing angles. Remember that angles on a straight line equal to 180 degrees.

1.  $b = \text{-----}^\circ$	2.  $c = \text{-----}^\circ$	1= 2= 3=
3.  $a = \text{-----}^\circ$	4.  $b = \text{-----}^\circ$	4= 5= 6= 7=
5.  $c = \text{-----}^\circ$	6.  $a = \text{-----}^\circ$	8=
7.  $b = \text{-----}^\circ$	8.  $c = \text{-----}^\circ$	