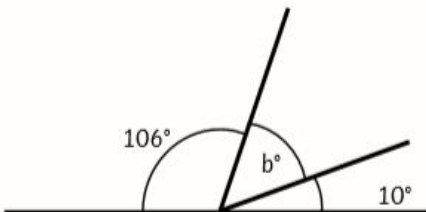
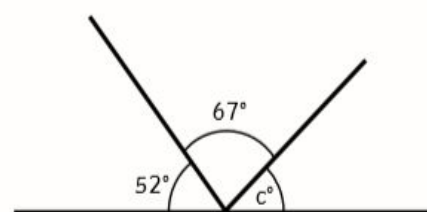
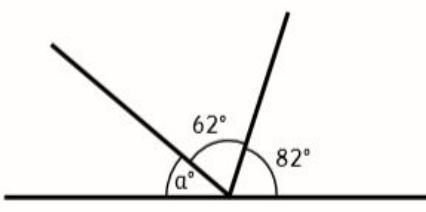
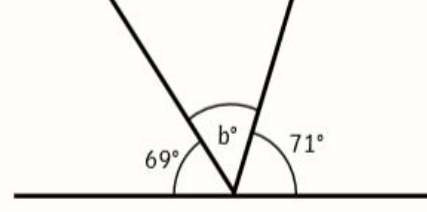
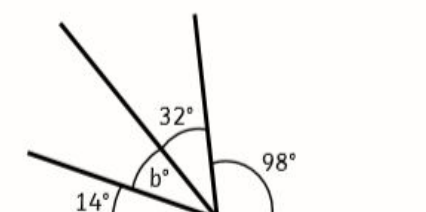
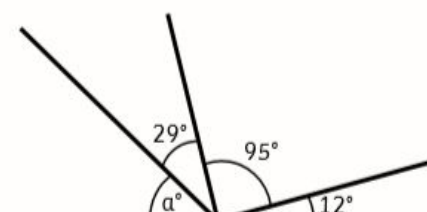
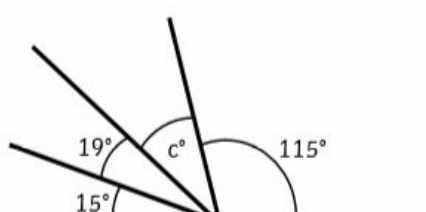
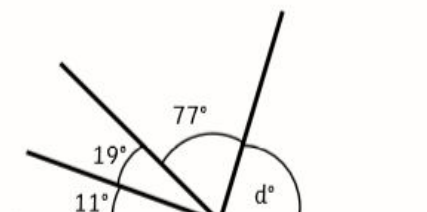


Challenge 2 Day 2

Work out the missing angles. Remember that angles on a straight line equal to 180 degrees.

<p>1.</p>  <p style="text-align: right;">$b = \text{-----}^\circ$</p>	<p>2.</p>  <p style="text-align: right;">$c = \text{-----}^\circ$</p>
<p>3.</p>  <p style="text-align: right;">$a = \text{-----}^\circ$</p>	<p>4.</p>  <p style="text-align: right;">$b = \text{-----}^\circ$</p>
<p>5.</p>  <p style="text-align: right;">$b = \text{-----}^\circ$</p>	<p>6.</p>  <p style="text-align: right;">$a = \text{-----}^\circ$</p>
<p>7.</p>  <p style="text-align: right;">$c = \text{-----}^\circ$</p>	<p>8.</p>  <p style="text-align: right;">$d = \text{-----}^\circ$</p>

1=

2=

3=

4=

5=

6=

7=

8=