

Name

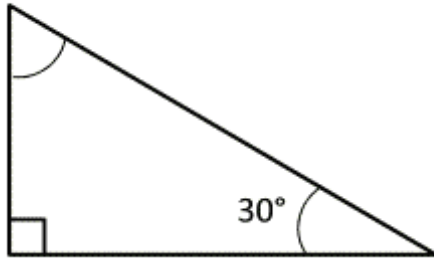
Date



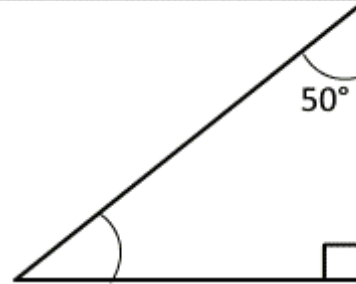
## ANGLES IN A TRIANGLE 1

Work out the missing angles. Remember that the angles in a triangle add up to  $180^\circ$ . The angles are not drawn to scale, so do not try to measure them!

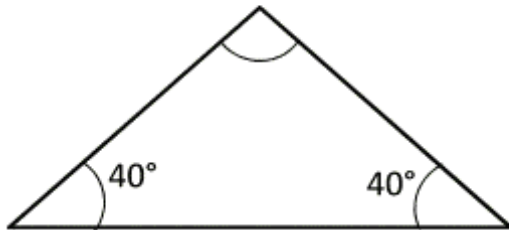
1)



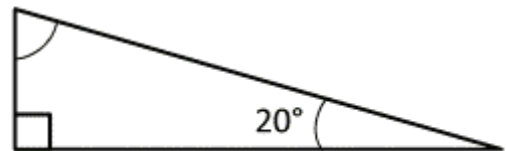
2)



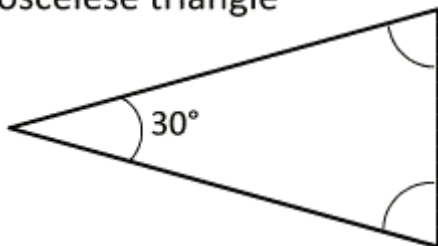
3)



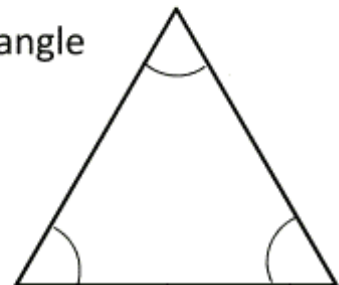
4)



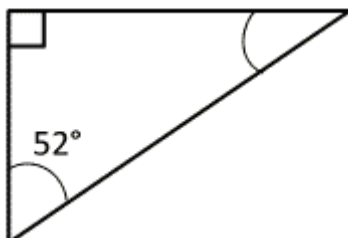
5) Isosceles triangle



6) Equilateral triangle

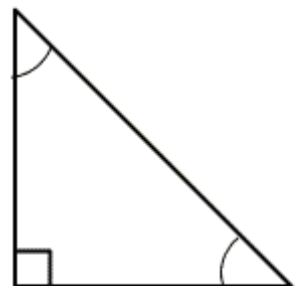


7)



8)

Isosceles triangle



Free Math Sheets, Math Games and Math Help

[MATH-SALAMANDERS.COM](http://MATH-SALAMANDERS.COM)